

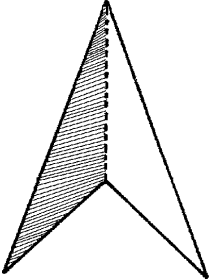
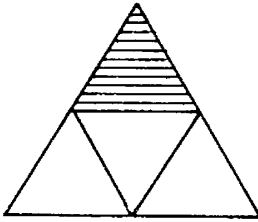
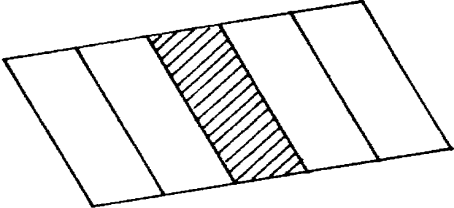
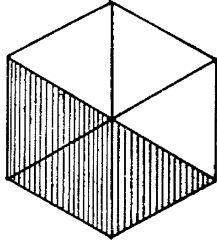
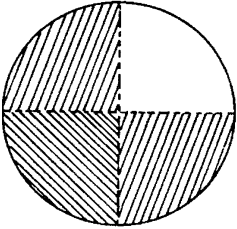
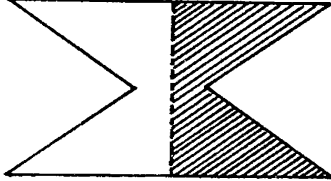
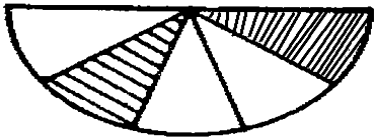
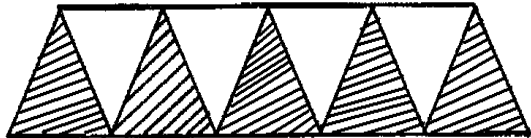
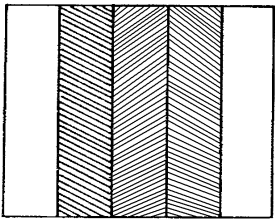

Name:

GRADE:

Revision exercises: Fractions

MATHEMATICS

What **fraction** is shaded in each of the following diagrams?

<p>(a)  Answer :</p>	<p>(b)  Answer :</p>
<p>(c)  Answer :</p>	<p>(d)  Answer :</p>
<p>(e)  Answer :</p>	<p>(f)  Answer :</p>
<p>(g)  Answer :</p>	<p>(h)  Answer :</p>
<p>(i)  Answer :</p>	<p>(j)  Answer :</p>